



NAME _____


DATE _____

DOUBLE GROUPS

Relate doubles to even numbers and write a number sentence to express the sums.

1) Q) Draw to double the group you see and complete the sentence.

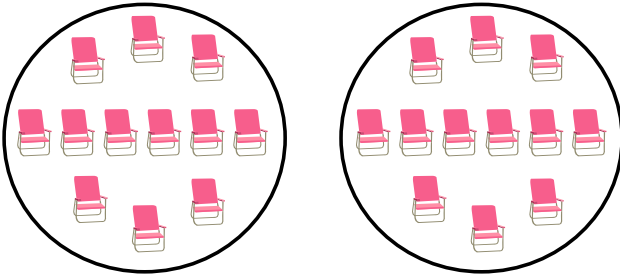
a)



There are ___ Flowers in each group.

$$__ + __ = __.$$

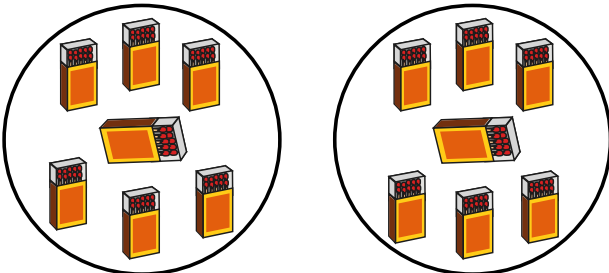
b)



There are ___ chairs in each group.

$$__ + __ = __.$$


c)



There are ___ Match boxes in each group.

$$__ + __ = __.$$


d)



There are ___ Apples in each group.

$$__ + __ = __.$$

e)



There are ___ cones in each group.

$$__ + __ = __.$$